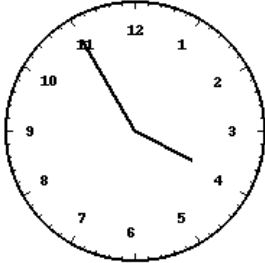
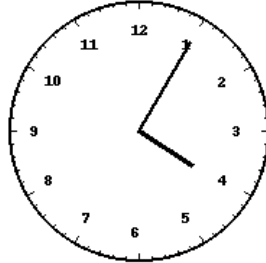


Lecture de l'heure sur une horloge à aiguilles (série 1)

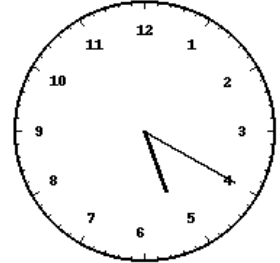
Pour chaque horloge, écris l'heure exacte (heure et minutes) en dessous.



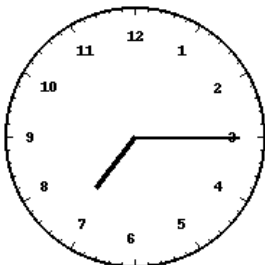
Horloge 1 : _____



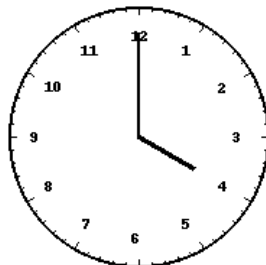
Horloge 2 : _____



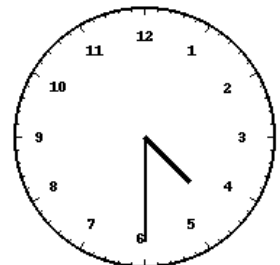
Horloge 3 : _____



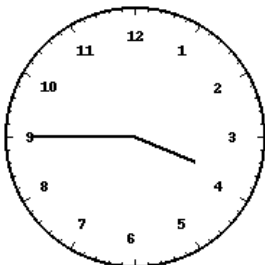
Horloge 4 : _____



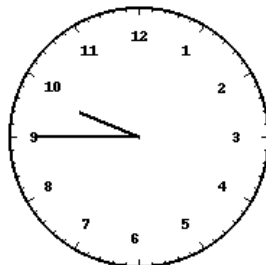
Horloge 5 : _____



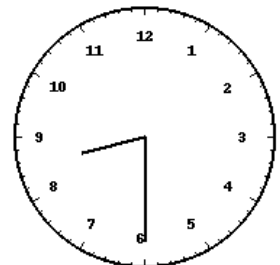
Horloge 6 : _____



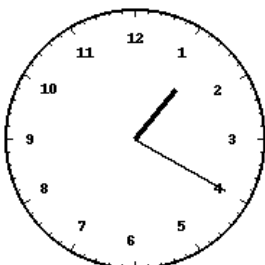
Horloge 7 : _____



Horloge 8 : _____



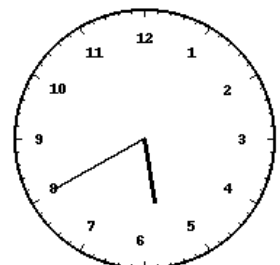
Horloge 9 : _____



Horloge 10 : _____

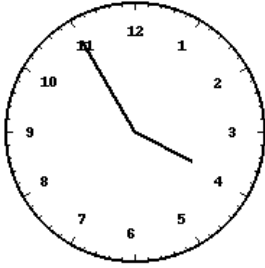


Horloge 11 : _____

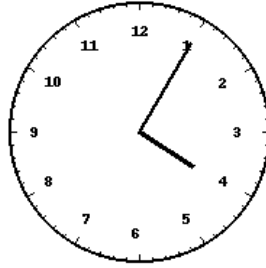


Horloge 12 : _____

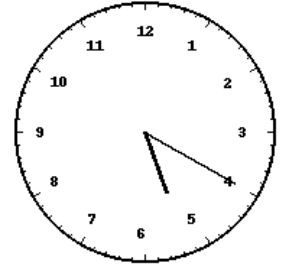
Corrections



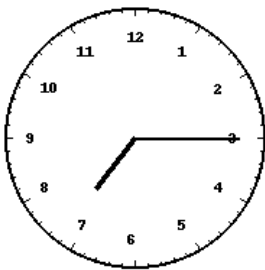
Horloge 1 : 03:55



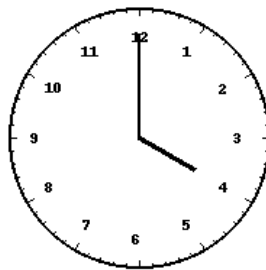
Horloge 2 : 04:05



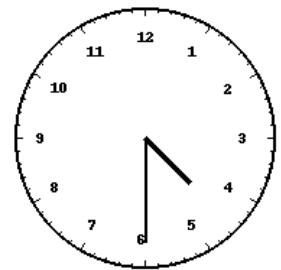
Horloge 3 : 05:20



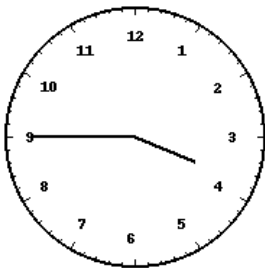
Horloge 4 : 07:15



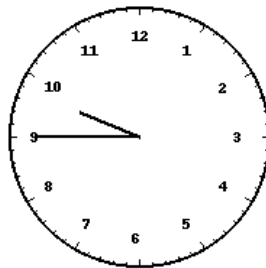
Horloge 5 : 04:00



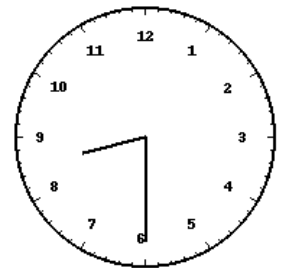
Horloge 6 : 04:30




Horloge 7 : 03:45



Horloge 8 : 09:45



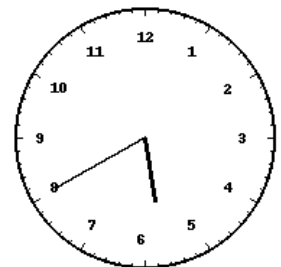
Horloge 9 : 08:30



Horloge 10 : 01:20



Horloge 11 : 10:25



Horloge 12 : 05:40