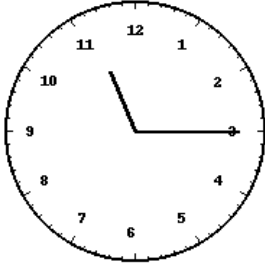
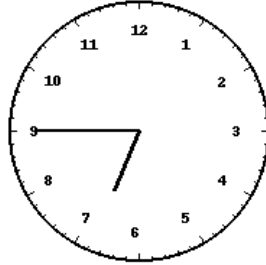


Lecture de l'heure sur une horloge à aiguilles (série 2)

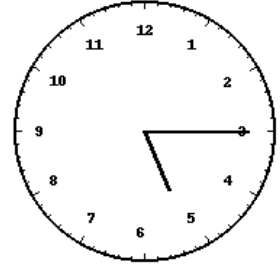
Pour chaque horloge, écris l'heure exacte (heure et minutes) en dessous.



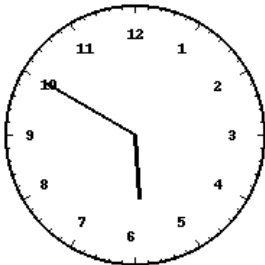
Horloge 1 : _____



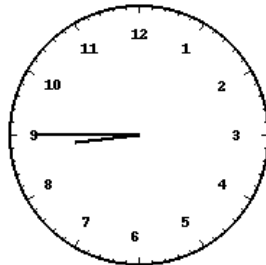
Horloge 2 : _____



Horloge 3 : _____




Horloge 4 : _____



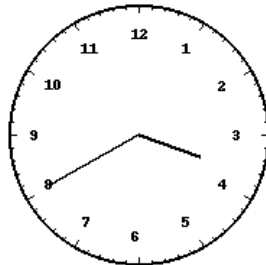
Horloge 5 : _____



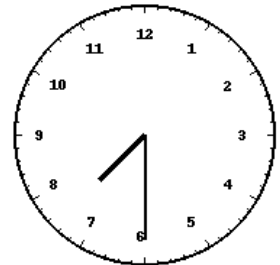
Horloge 6 : _____



Horloge 7 : _____



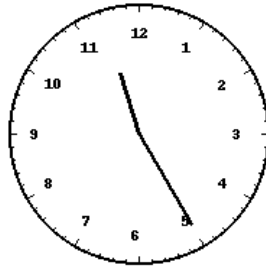
Horloge 8 : _____



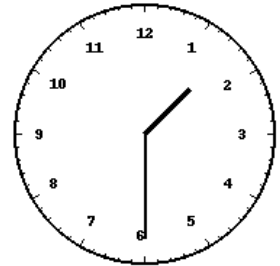
Horloge 9 : _____



Horloge 10 : _____

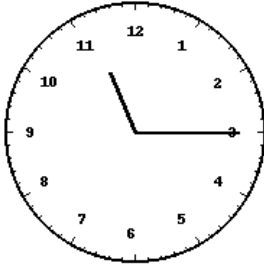


Horloge 11 : _____

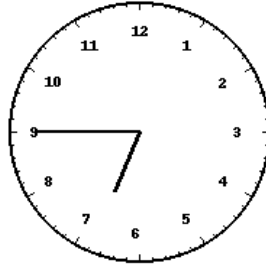


Horloge 12 : _____

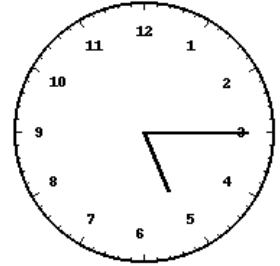
Corrections



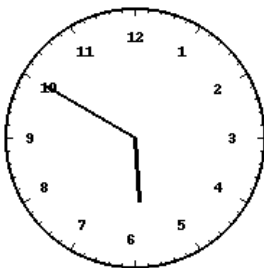
Horloge 1 : **11:15**



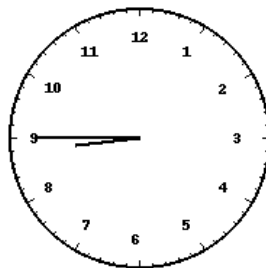
Horloge 2 : **06:45**



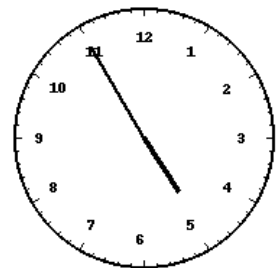
Horloge 3 : **05:15**



Horloge 4 : **05:50**



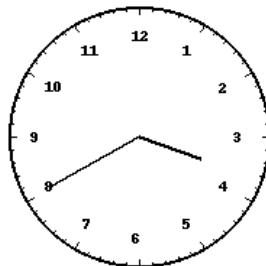
Horloge 5 : **08:45**



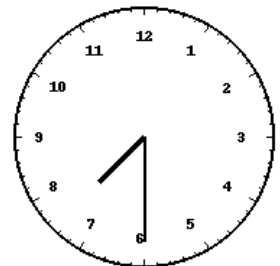
Horloge 6 : **04:55**




Horloge 7 : **04:50**



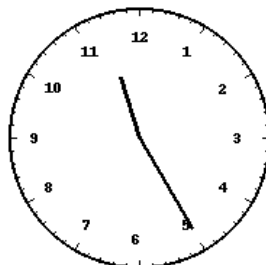
Horloge 8 : **03:40**



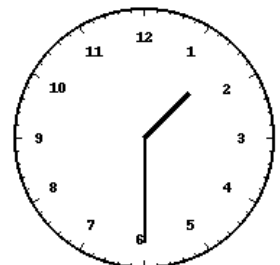
Horloge 9 : **07:30**



Horloge 10 : **02:50**



Horloge 11 : **11:25**



Horloge 12 : **01:30**