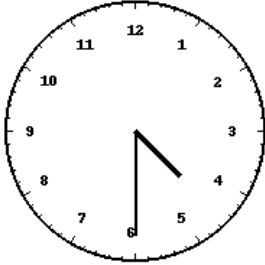


Lecture de l'heure sur une horloge à aiguilles (série 3)

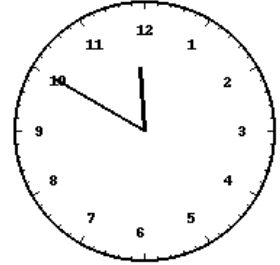
Pour chaque horloge, écris l'heure exacte (heure et minutes) en dessous.



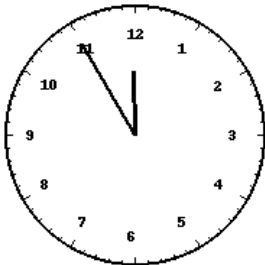
Horloge 1 : _____



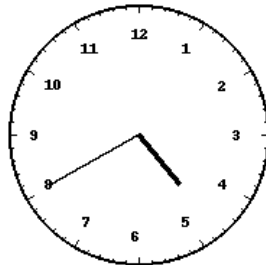
Horloge 2 : _____



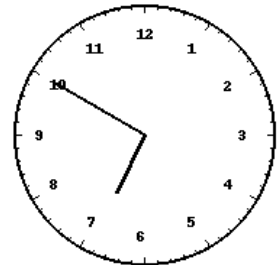
Horloge 3 : _____



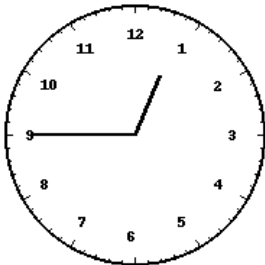
Horloge 4 : _____



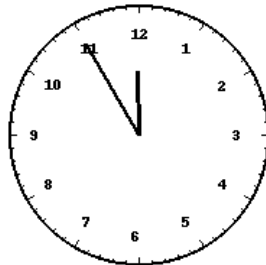
Horloge 5 : _____



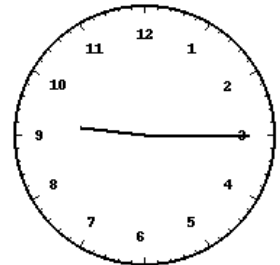
Horloge 6 : _____



Horloge 7 : _____



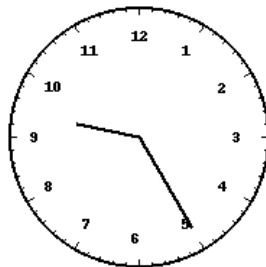
Horloge 8 : _____



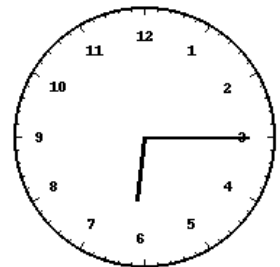
Horloge 9 : _____



Horloge 10 : _____

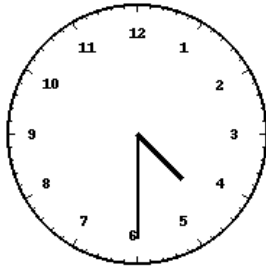


Horloge 11 : _____



Horloge 12 : _____

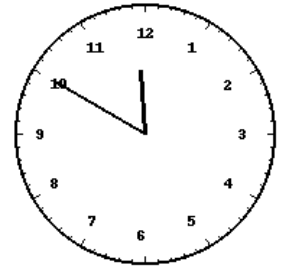
Corrections



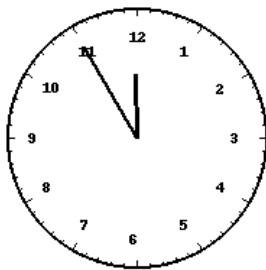
Horloge 1 : 04:30



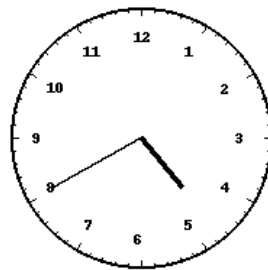
Horloge 2 : 04:20



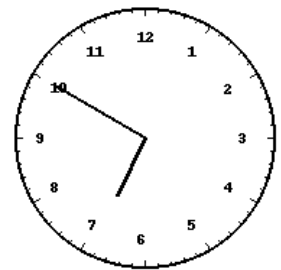
Horloge 3 : 11:50



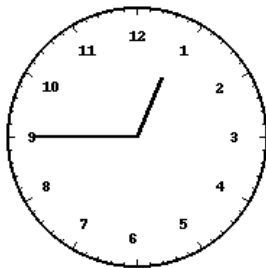
Horloge 4 : 11:55



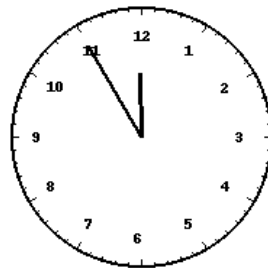
Horloge 5 : 04:40



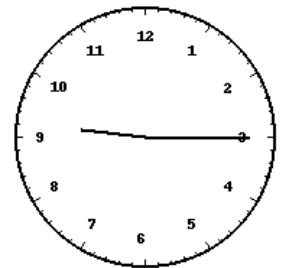
Horloge 6 : 06:50



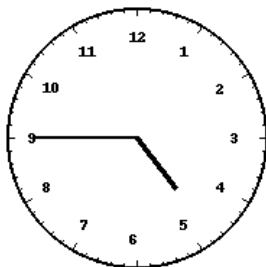
Horloge 7 : 12:45



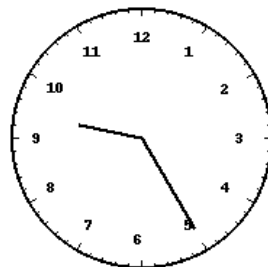
Horloge 8 : 11:55



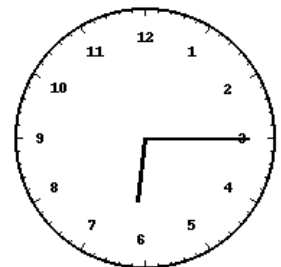
Horloge 9 : 09:15



Horloge 10 : 04:45



Horloge 11 : 09:25



Horloge 12 : 06:15