


## Lecture de l'heure sur une horloge à aiguilles (série 4)

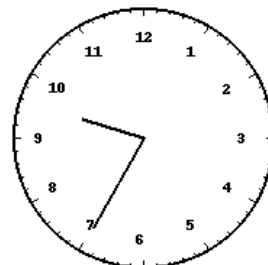
Pour chaque horloge, écris l'heure exacte (heure et minutes) en dessous.




Horloge 1 : \_\_\_\_\_



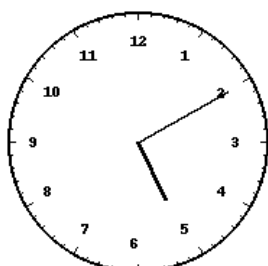
Horloge 2 : \_\_\_\_\_



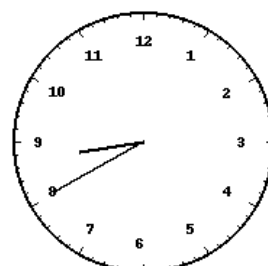
Horloge 3 : \_\_\_\_\_



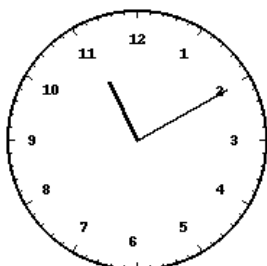
Horloge 4 : \_\_\_\_\_



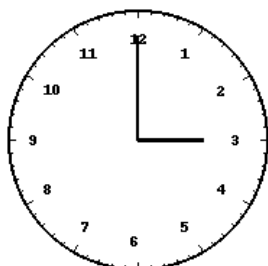
Horloge 5 : \_\_\_\_\_



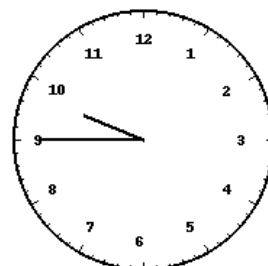
Horloge 6 : \_\_\_\_\_



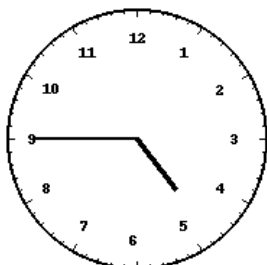
Horloge 7 : \_\_\_\_\_



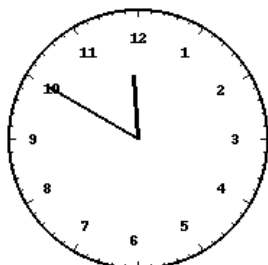
Horloge 8 : \_\_\_\_\_



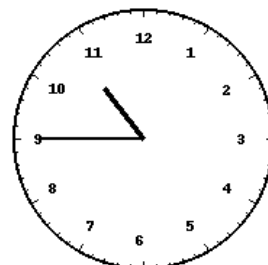
Horloge 9 : \_\_\_\_\_



Horloge 10 : \_\_\_\_\_

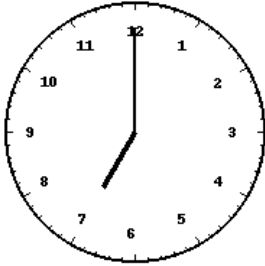


Horloge 11 : \_\_\_\_\_

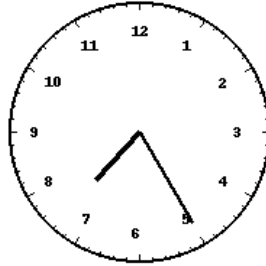


Horloge 12 : \_\_\_\_\_

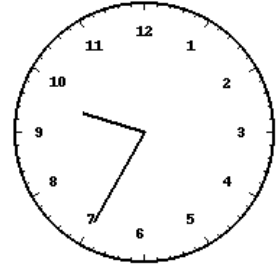
Corrections



Horloge 1 : 07:00



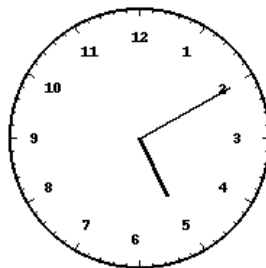
Horloge 2 : 07:25



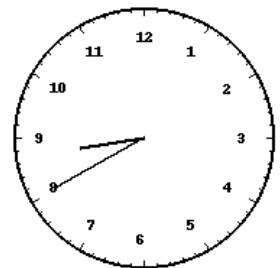
Horloge 3 : 09:35



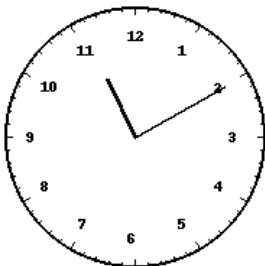
Horloge 4 : 01:10



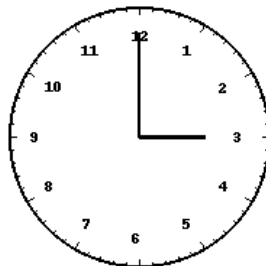
Horloge 5 : 05:10



Horloge 6 : 08:40



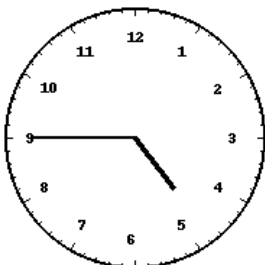
Horloge 7 : 11:10



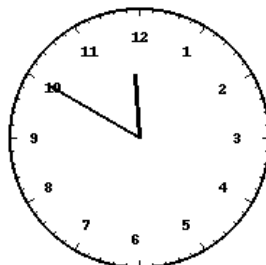
Horloge 8 : 03:00



Horloge 9 : 09:45



Horloge 10 : 04:45



Horloge 11 : 11:50



Horloge 12 : 10:45