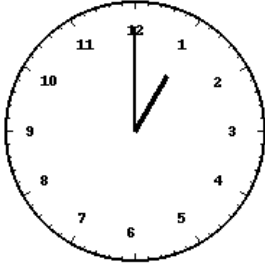
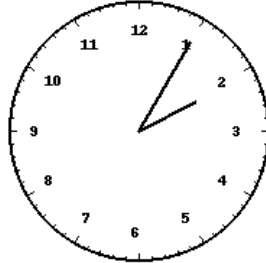


Lecture de l'heure sur une horloge à aiguilles (série 5)

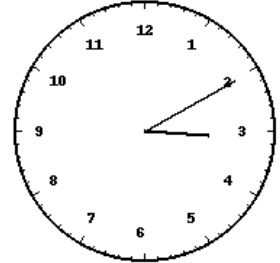
Pour chaque horloge, écris l'heure exacte (heure et minutes) en dessous.



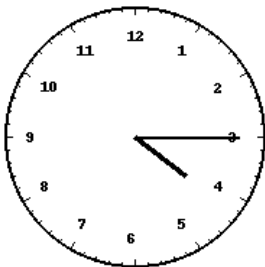
Horloge 1 : _____



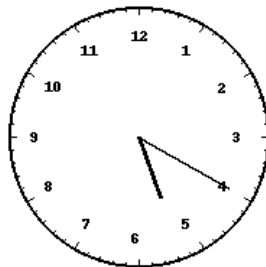
Horloge 2 : _____



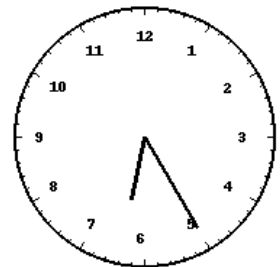
Horloge 3 : _____



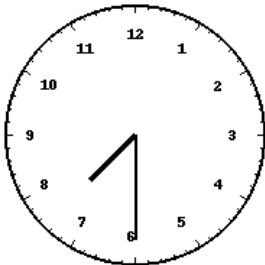
Horloge 4 : _____



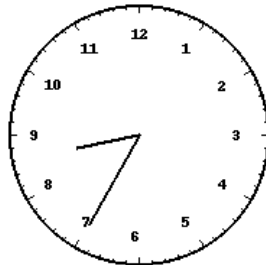
Horloge 5 : _____



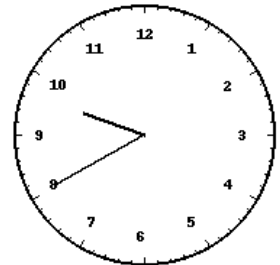
Horloge 6 : _____



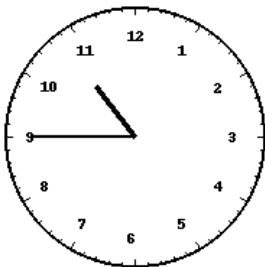
Horloge 7 : _____



Horloge 8 : _____



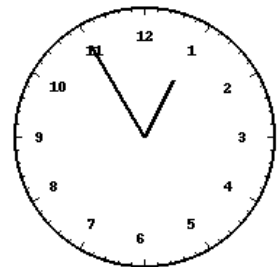
Horloge 9 : _____



Horloge 10 : _____

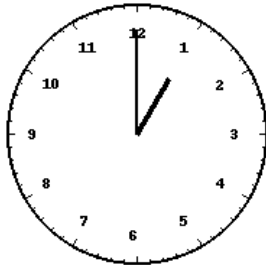


Horloge 11 : _____

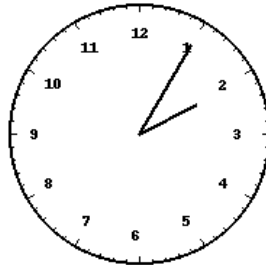


Horloge 12 : _____

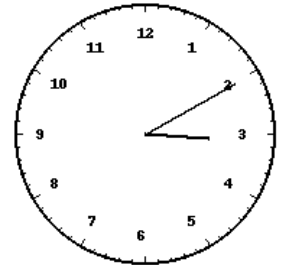
Corrections



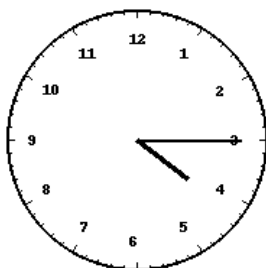
Horloge 1 : **01:00**



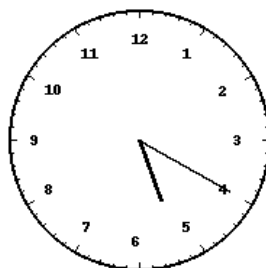
Horloge 2 : **02:05**



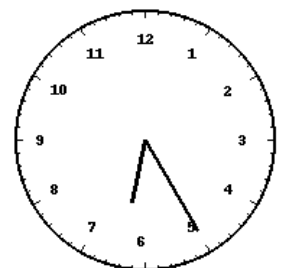
Horloge 3 : **03:10**



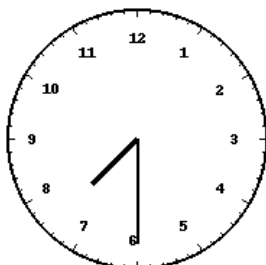
Horloge 4 : **04:15**



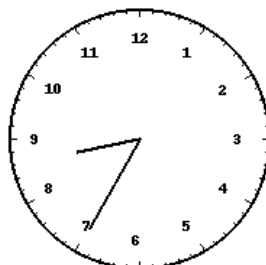
Horloge 5 : **05:20**



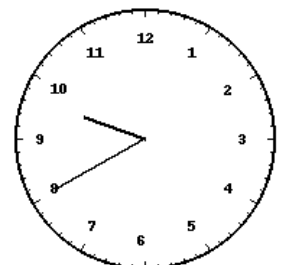
Horloge 6 : **06:25**



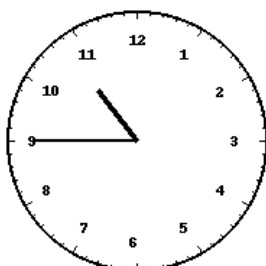
Horloge 7 : **07:30**



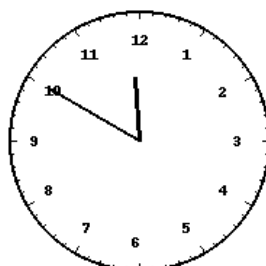
Horloge 8 : **08:35**



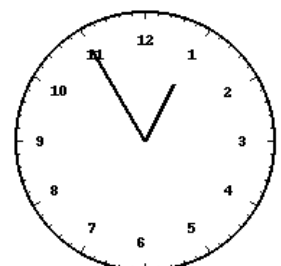
Horloge 9 : **09:40**



Horloge 10 : **10:45**



Horloge 11 : **11:50**



Horloge 12 : **12:55**